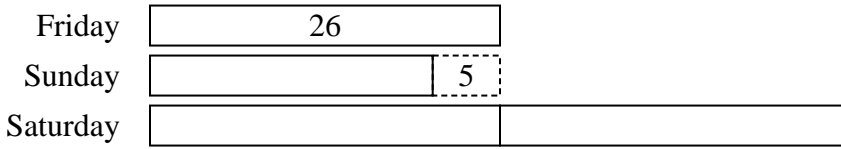




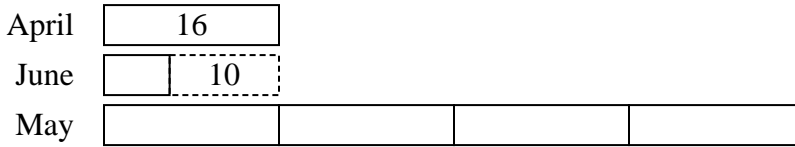


Solve each problem using a tape diagram.

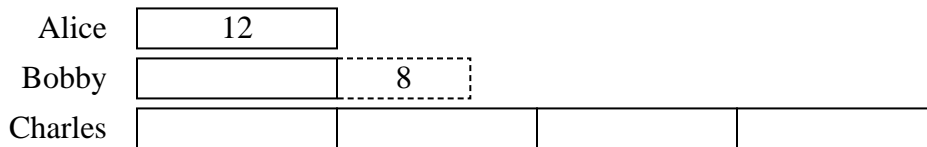
- 1) On Friday a game store sold 26 copies of the new Mario game. On Saturday they sold 2 times as many as on Friday. And then on Sunday they sold 5 less than the amount on Friday. How many did they sell total?



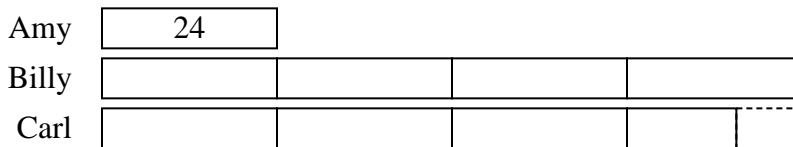
- 2) In April, Larry's Lawn Care mowed 16 lawns. They mowed 4 times as many in May and 10 fewer in June. How many lawns did they mow over those three months?



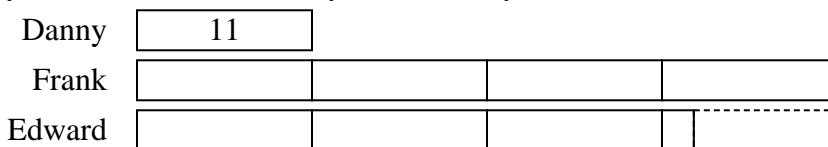
- 3) Alice, Bobby and Charles were collecting cans. Charles collected 4 times as many cans as Alice. Alice collected 12 cans. And Bobby collected 8 more cans than Alice. How many cans did they collect total?



- 4) Amy, Billy and Carl were working on a school project. Amy spent 24 minutes on her portion. Billy spent 4 times as long on his portion. And Carl spent 9 minutes fewer than Billy did. How many minutes total were they working?



- 5) Debby's TV emporium was running a contest to see which employee could sell the most TVs. Frank sold 4 times as many TVs as Danny. Edward sold 9 fewer than Frank. And Danny sold 11 TVs. How many TVs did they sell total?



**Answers**

1. 99
2. 86
3. 80
4. 207
5. 90